
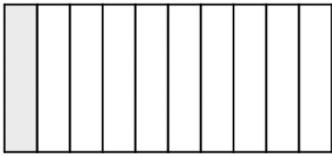
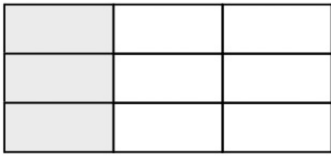
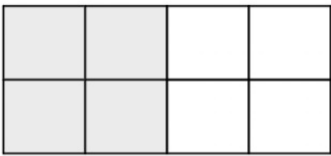
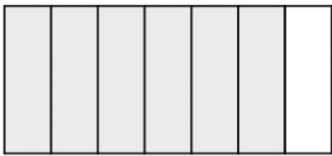

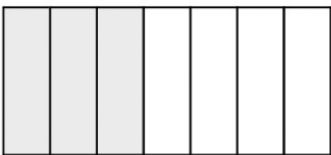
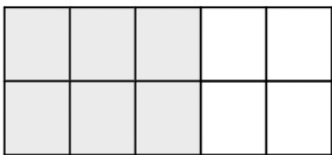
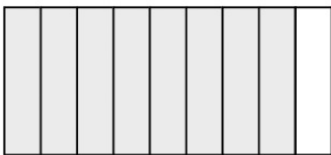


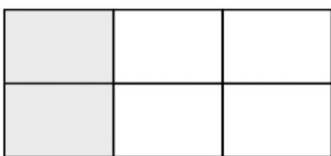

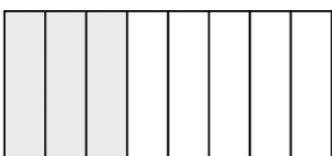

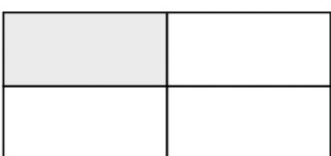


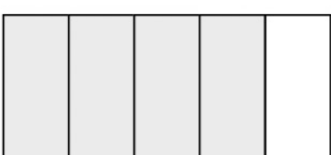
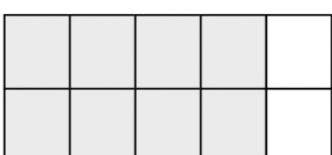
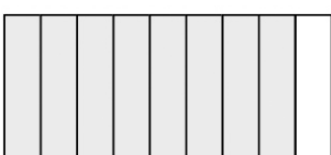
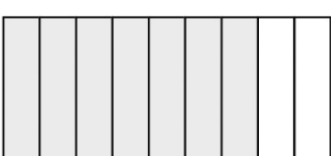

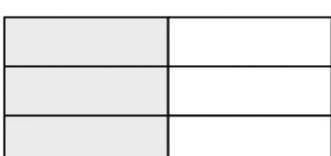


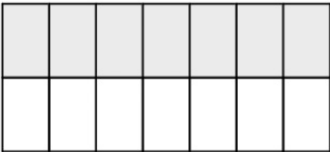
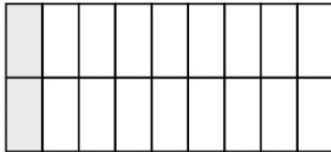
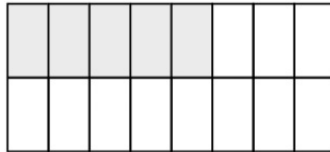
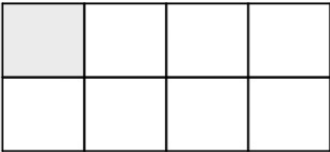
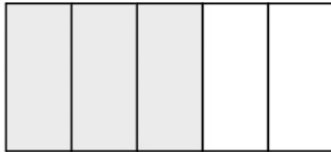

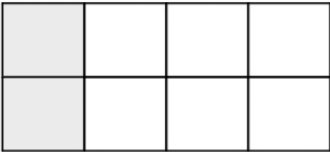


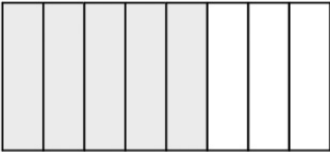
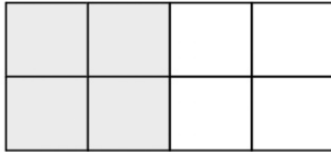

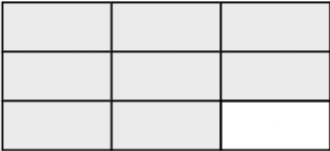
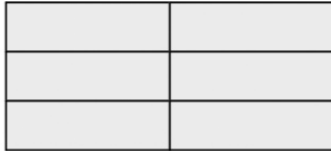

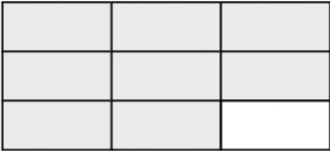
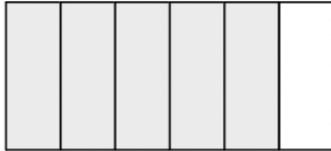


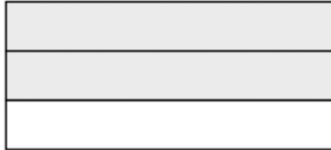




Scrivi la frazione corrispondente

© www.baby-flash.com

| | | |
|--|---|---|
|  $= \frac{\boxed{}}{\boxed{}}$ |  $= \frac{\boxed{}}{\boxed{}}$ |  $= \frac{\boxed{}}{\boxed{}}$ |
|  $= \frac{\boxed{}}{\boxed{}}$ |  $= \frac{\boxed{}}{\boxed{}}$ |  $= \frac{\boxed{}}{\boxed{}}$ |
|  $= \frac{\boxed{}}{\boxed{}}$ |  $= \frac{\boxed{}}{\boxed{}}$ |  $= \frac{\boxed{}}{\boxed{}}$ |
|  $= \frac{\boxed{}}{\boxed{}}$ |  $= \frac{\boxed{}}{\boxed{}}$ |  $= \frac{\boxed{}}{\boxed{}}$ |
|  $= \frac{\boxed{}}{\boxed{}}$ |  $= \frac{\boxed{}}{\boxed{}}$ |  $= \frac{\boxed{}}{\boxed{}}$ |
|  $= \frac{\boxed{}}{\boxed{}}$ |  $= \frac{\boxed{}}{\boxed{}}$ |  $= \frac{\boxed{}}{\boxed{}}$ |
|  $= \frac{\boxed{}}{\boxed{}}$ |  $= \frac{\boxed{}}{\boxed{}}$ |  $= \frac{\boxed{}}{\boxed{}}$ |
|  $= \frac{\boxed{}}{\boxed{}}$ |  $= \frac{\boxed{}}{\boxed{}}$ |  $= \frac{\boxed{}}{\boxed{}}$ |

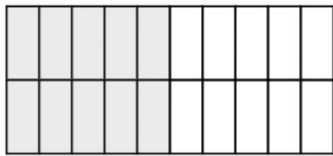
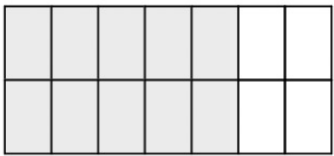
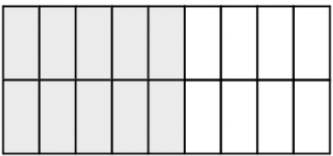
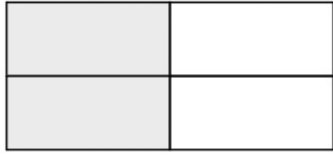

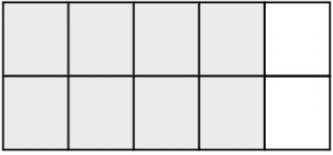
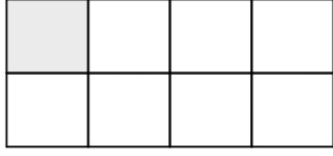

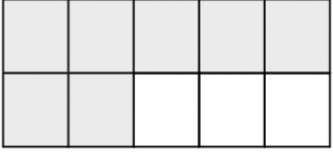
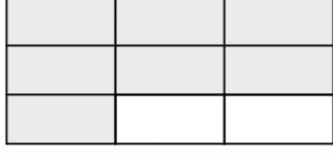
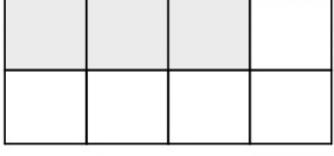




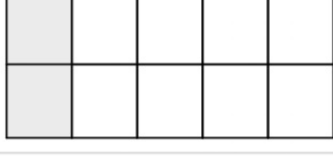
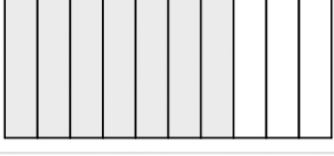
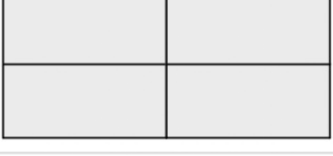



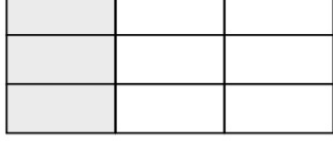
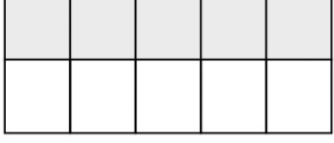
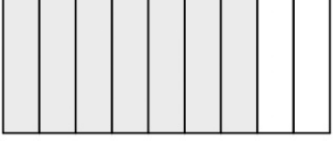
Scrivi la frazione corrispondente

© www.baby-flash.com

| | | |
|--|---|---|
|  = $\frac{\square}{\square}$ |  = $\frac{\square}{\square}$ |  = $\frac{\square}{\square}$ |
|  = $\frac{\square}{\square}$ |  = $\frac{\square}{\square}$ |  = $\frac{\square}{\square}$ |
|  = $\frac{\square}{\square}$ |  = $\frac{\square}{\square}$ |  = $\frac{\square}{\square}$ |
|  = $\frac{\square}{\square}$ |  = $\frac{\square}{\square}$ |  = $\frac{\square}{\square}$ |
|  = $\frac{\square}{\square}$ |  = $\frac{\square}{\square}$ |  = $\frac{\square}{\square}$ |
|  = $\frac{\square}{\square}$ |  = $\frac{\square}{\square}$ |  = $\frac{\square}{\square}$ |
|  = $\frac{\square}{\square}$ |  = $\frac{\square}{\square}$ |  = $\frac{\square}{\square}$ |
|  = $\frac{\square}{\square}$ |  = $\frac{\square}{\square}$ |  = $\frac{\square}{\square}$ |

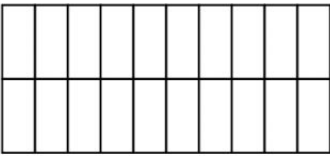
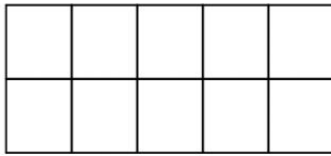
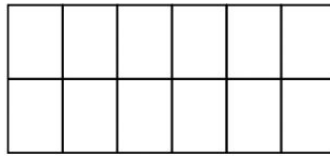
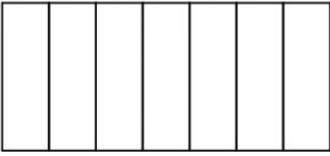

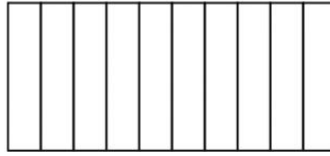

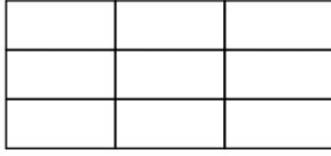
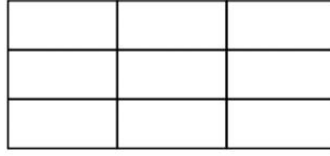

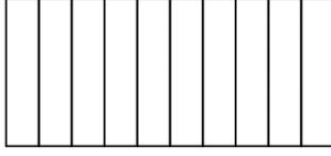
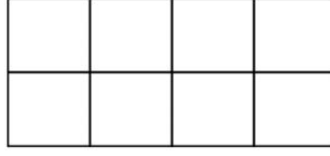




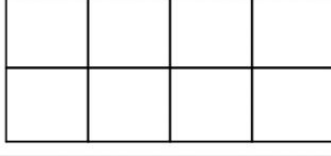

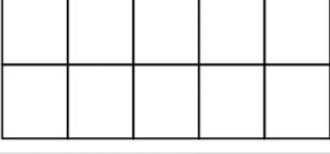
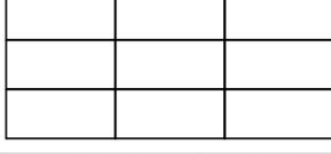




Scrivi la frazione corrispondente

© www.baby-flash.com

| | | |
|--|---|---|
|  = $\frac{\boxed{}}{\boxed{}}$ |  = $\frac{\boxed{}}{\boxed{}}$ |  = $\frac{\boxed{}}{\boxed{}}$ |
|  = $\frac{\boxed{}}{\boxed{}}$ |  = $\frac{\boxed{}}{\boxed{}}$ |  = $\frac{\boxed{}}{\boxed{}}$ |
|  = $\frac{\boxed{}}{\boxed{}}$ |  = $\frac{\boxed{}}{\boxed{}}$ |  = $\frac{\boxed{}}{\boxed{}}$ |
|  = $\frac{\boxed{}}{\boxed{}}$ |  = $\frac{\boxed{}}{\boxed{}}$ |  = $\frac{\boxed{}}{\boxed{}}$ |
|  = $\frac{\boxed{}}{\boxed{}}$ |  = $\frac{\boxed{}}{\boxed{}}$ |  = $\frac{\boxed{}}{\boxed{}}$ |
|  = $\frac{\boxed{}}{\boxed{}}$ |  = $\frac{\boxed{}}{\boxed{}}$ |  = $\frac{\boxed{}}{\boxed{}}$ |
|  = $\frac{\boxed{}}{\boxed{}}$ |  = $\frac{\boxed{}}{\boxed{}}$ |  = $\frac{\boxed{}}{\boxed{}}$ |
|  = $\frac{\boxed{}}{\boxed{}}$ |  = $\frac{\boxed{}}{\boxed{}}$ |  = $\frac{\boxed{}}{\boxed{}}$ |

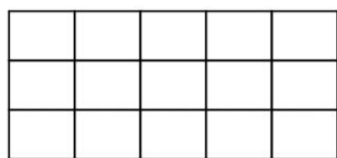
Colora le parti corrispondenti alla frazione data

© www.baby-flash.com

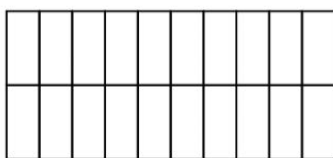
| | | |
|--|--|--|
|  = $\frac{20}{20}$ |  = $\frac{2}{10}$ |  = $\frac{8}{12}$ |
|  = $\frac{5}{7}$ |  = $\frac{3}{4}$ |  = $\frac{1}{10}$ |
|  = $\frac{1}{8}$ |  = $\frac{5}{9}$ |  = $\frac{4}{9}$ |
|  = $\frac{1}{1}$ |  = $\frac{5}{10}$ |  = $\frac{3}{8}$ |
|  = $\frac{7}{8}$ |  = $\frac{2}{10}$ |  = $\frac{6}{10}$ |
|  = $\frac{2}{3}$ |  = $\frac{8}{8}$ |  = $\frac{2}{5}$ |
|  = $\frac{10}{10}$ |  = $\frac{5}{9}$ |  = $\frac{1}{6}$ |
|  = $\frac{2}{2}$ |  = $\frac{1}{3}$ |  = $\frac{4}{4}$ |

Colora le parti corrispondenti alla frazione data

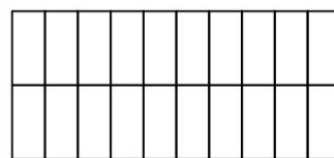
© www.baby-flash.com



$$= \frac{4}{15}$$



$$= \frac{12}{20}$$



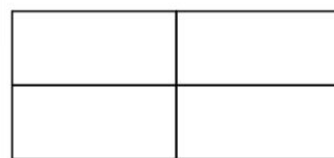
$$= \frac{16}{20}$$



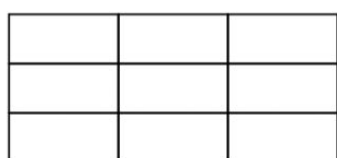
$$= \frac{2}{9}$$



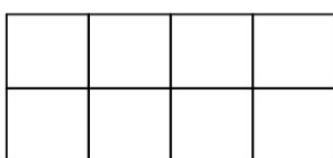
$$= \frac{7}{9}$$



$$= \frac{4}{4}$$



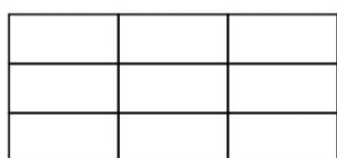
$$= \frac{8}{9}$$



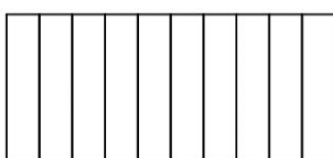
$$= \frac{2}{8}$$



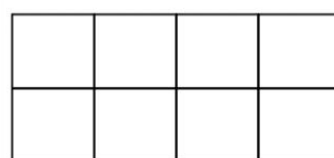
$$= \frac{1}{1}$$




$$= \frac{6}{9}$$



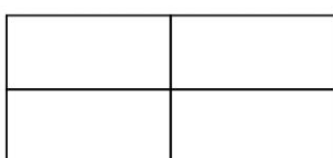
$$= \frac{3}{10}$$



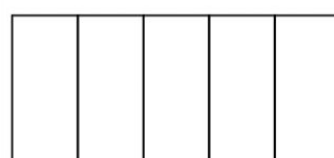
$$= \frac{2}{8}$$



$$= \frac{1}{4}$$



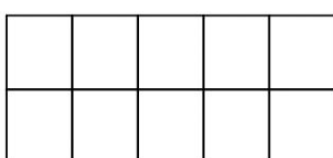
$$= \frac{2}{4}$$




$$= \frac{1}{5}$$




$$= \frac{5}{10}$$




$$= \frac{3}{10}$$



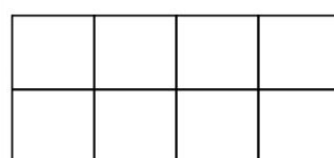
$$= \frac{5}{7}$$



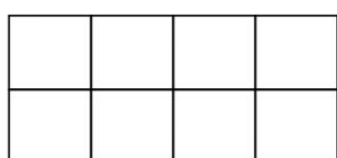
$$= \frac{1}{2}$$



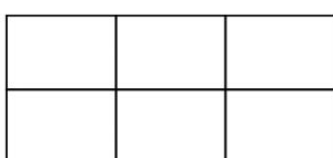
$$= \frac{4}{7}$$



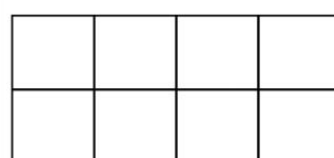
$$= \frac{7}{8}$$



$$= \frac{5}{8}$$



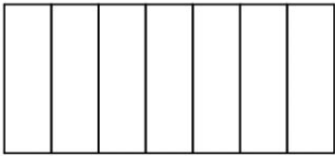
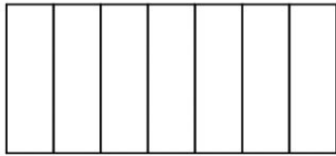
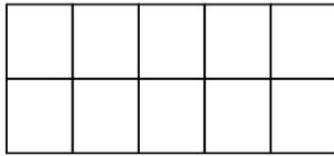

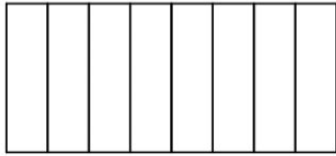
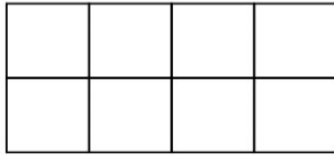
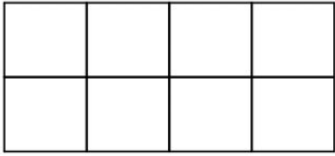
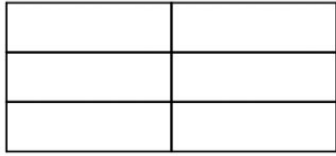
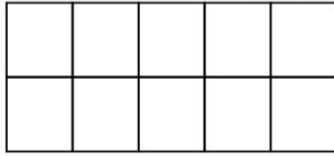

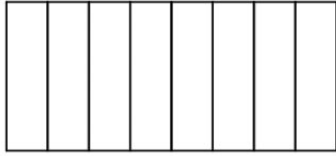
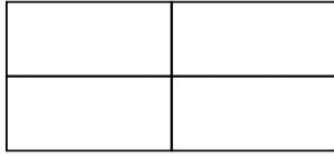
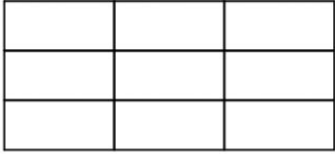
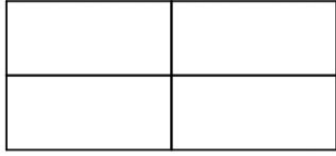


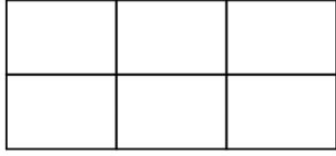
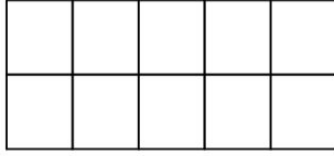
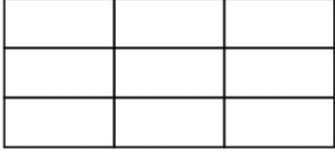
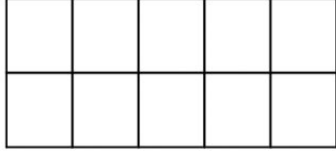
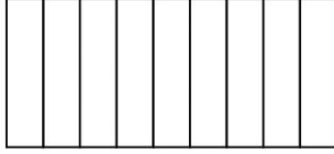



$$= \frac{5}{6}$$



$$= \frac{4}{8}$$

Colora le parti corrispondenti alla frazione data

© www.baby-flash.com

| | | |
|--|--|---|
|  = $\frac{3}{7}$ |  = $\frac{1}{7}$ |  = $\frac{3}{10}$ |
|  = $\frac{3}{8}$ |  = $\frac{5}{8}$ |  = $\frac{2}{8}$ |
|  = $\frac{4}{8}$ |  = $\frac{6}{6}$ |  = $\frac{5}{10}$ |
|  = $\frac{1}{10}$ |  = $\frac{7}{8}$ |  = $\frac{1}{4}$ |
|  = $\frac{1}{9}$ |  = $\frac{2}{4}$ |  = $\frac{3}{5}$ |
|  = $\frac{5}{7}$ |  = $\frac{1}{6}$ |  = $\frac{10}{10}$ |
|  = $\frac{8}{9}$ |  = $\frac{3}{10}$ |  = $\frac{2}{9}$ |
|  = $\frac{3}{5}$ |  = $\frac{1}{3}$ |  = $\frac{2}{7}$ |