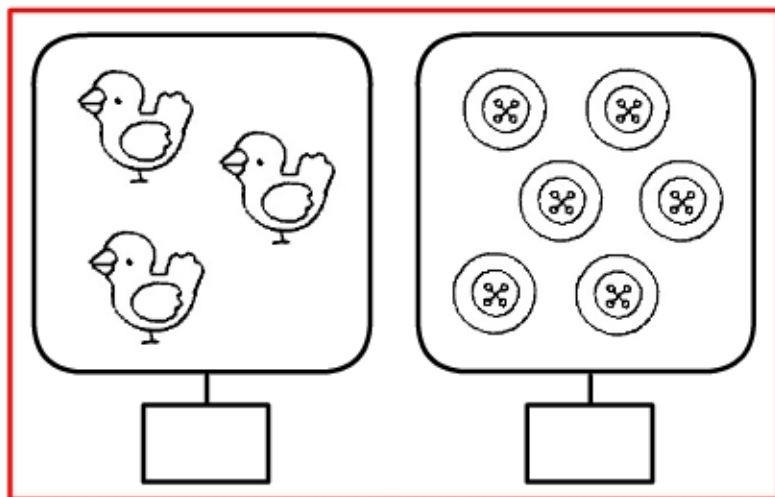


# Addizioni 7

COMPLETA I CARTELLINI E SCRIVI L'ADDIZIONE



PULCINI  $\longrightarrow$

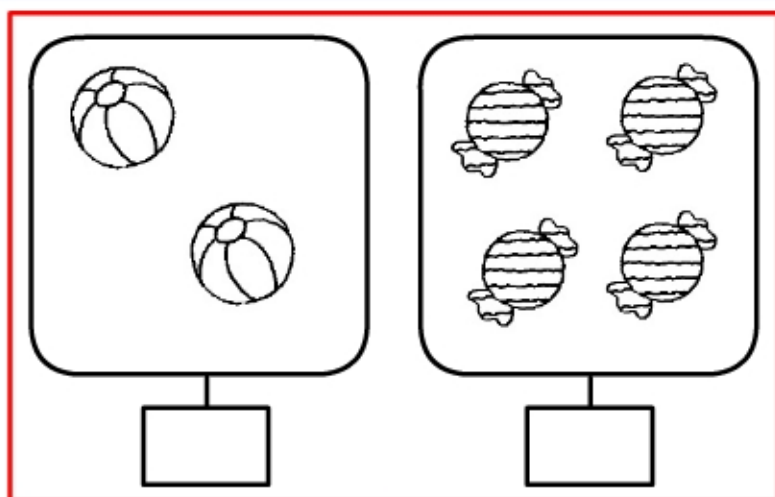
BOTTONI  $\longrightarrow$

IN TUTTO  $\longrightarrow$

$\underline{\quad} + \underline{\quad} = \underline{\quad}$



TRE PIÙ SEI UGUALE .....



PALLE  $\longrightarrow$


CARAMELLE  $\longrightarrow$

IN TUTTO  $\longrightarrow$

$\underline{\quad} + \underline{\quad} = \underline{\quad}$



DUE PIÙ QUATTRO UGUALE .....



API  $\longrightarrow$

OMBRELLI  $\longrightarrow$

IN TUTTO  $\longrightarrow$

$\underline{\quad} + \underline{\quad} = \underline{\quad}$



OTTO PIÙ TRE UGUALE .....