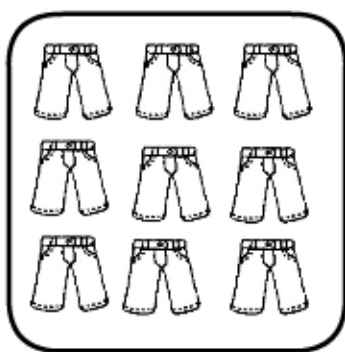


# Addizioni 10

## COMPLETA I CARTELLINI E SCRIVI L'ADDIZIONE





PANTALONI →

PATTINI →

IN TUTTO →

\_\_\_ + \_\_\_ = \_\_\_

NOVE PIÙ SEI UGUALE .....





COCCINELLE →

CAPPELLI →

IN TUTTO →

\_\_\_ + \_\_\_ = \_\_\_

SETTE PIÙ OTTO UGUALE .....



CONIGLI →

BANANE →

IN TUTTO →

\_\_\_ + \_\_\_ = \_\_\_

CINQUE PIÙ DIECI UGUALE .....