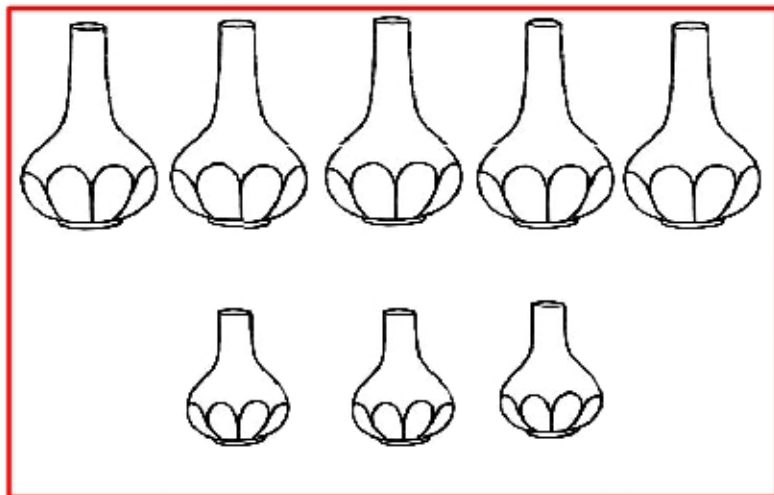


# Sottrazioni 4

OSSERVA, COMPLETA I CARTELLINI E SCRIVI L'OPERAZIONE



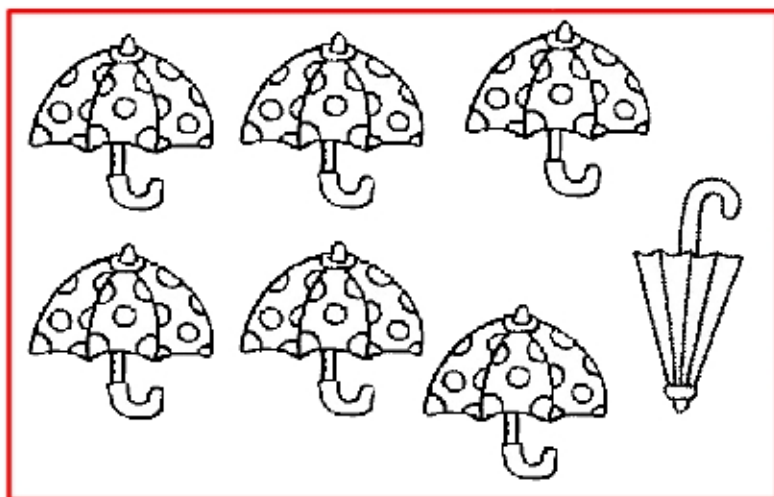
VASI IN TUTTO

VASI PICCOLI

VASI GRANDI

$$\underline{\quad} - \underline{\quad} = \underline{\quad}$$

OTTO MENO ..... UGUALE .....




OMBRELLI IN TUTTO

OMBRELLI CHIUSI

OMBRELLI APERTI

$$\underline{\quad} - \underline{\quad} = \underline{\quad}$$

..... MENO ..... UGUALE .....



VAGONI IN TUTTO

VAGONI VUOTI

VAGONI PIENI

$$\underline{\quad} - \underline{\quad} = \underline{\quad}$$

..... MENO TRE UGUALE .....